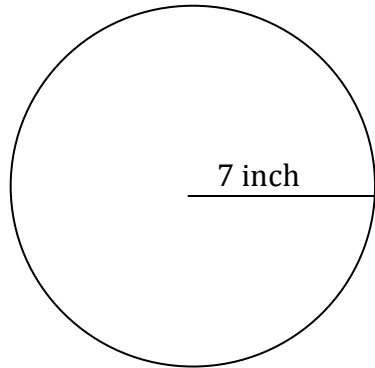


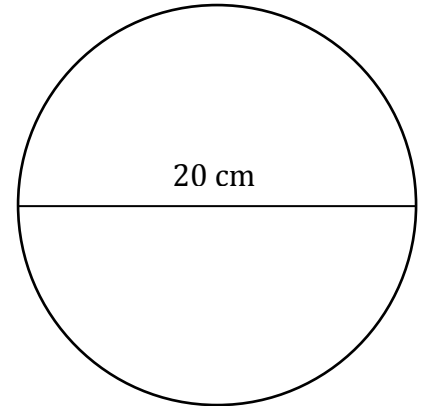
Finding the Area of a Circle from its Radius or Diameter

Find the [area of the circle](#) in each of the following problems. Make sure to find the radius when the diameter of the circle is given.

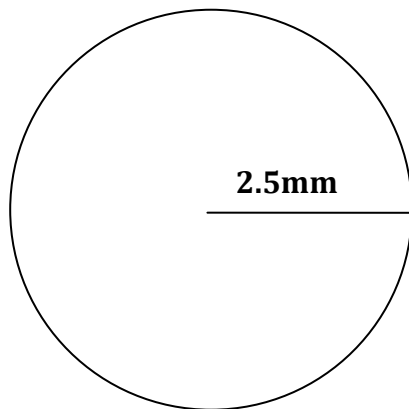
1.



2.



3. Find the area of the given circle.



4. Find the area of the circle below.

